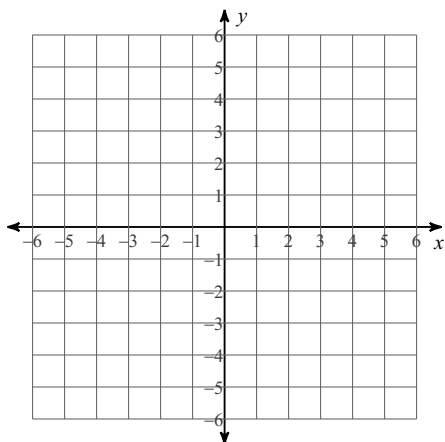


Exit Ticket (Graphing Practice)

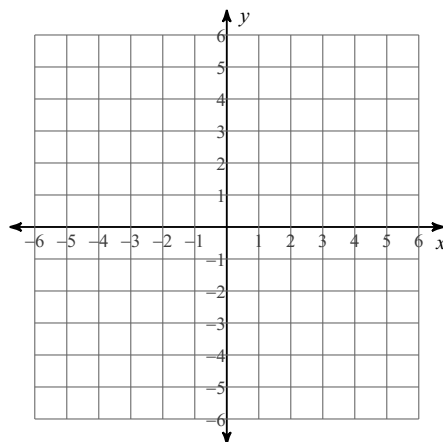
Date _____ Period _____

Sketch the graph of each line.

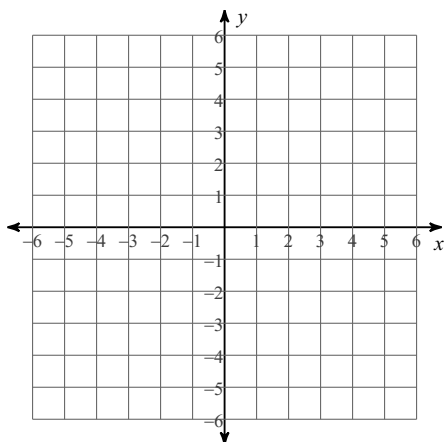
1) $5x + 4y = -8$



2) $2x - 5y = -10$



3) $y = -\frac{2}{3}x + 2$



4) $y = x + 1$

