

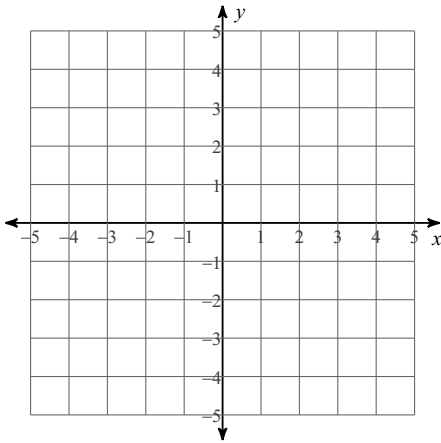
Exit Ticket Solving Systems of Inequalities

Date _____ Period _____

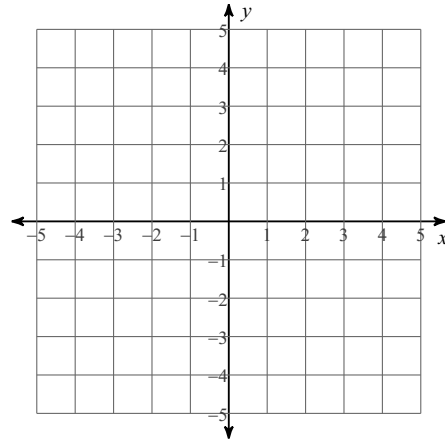
Sketch the solution to each system of inequalities.

1) $y > \frac{5}{2}x - 2$

$y < \frac{1}{2}x + 2$

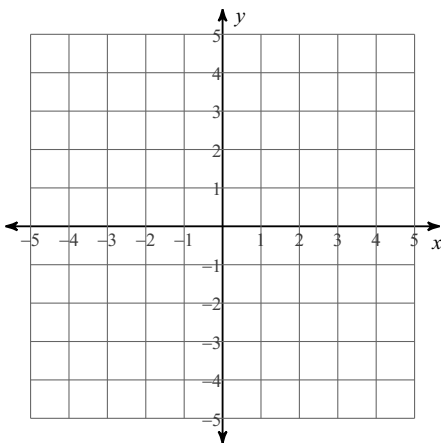


2) $y \geq -x + 2$
 $y > -x - 2$



3) $y < 2x - 1$

$y \leq \frac{1}{2}x + 2$



4) $y > -4x + 1$
 $y < -x - 2$

